

Name:

Weekly Math Review - Q2:4

Date:

Monday**Tuesday**Compare the numbers using $>$, $<$, or $=$.

$827,937 \underline{\hspace{1cm}} 827,017$

$8,278,492 \underline{\hspace{1cm}} 8,372,189$

Write this number in expanded form.

twenty three thousand, four hundred thirty six

Find the Sum.

$27,202 + 3,489$

Find the Difference.

$27,202 - 3,489$

Find the Product.

729×84

Find the Product.

$7,876 \times 8$

Find the Quotient.

$3,729 \div 5$

Find the Quotient.

$6,392 \div 8$

A book salesman sold 6,358 books. Each book cost \$8. How much money did he make?

There are 568 boxes of erasers. In each box, there are 48 erasers. How many erasers are there in all?

Find ALL the factors of 45. Prime or Composite?

Find the first 5 multiples of 9.

Fill in the table and find the rule.

1	5
2	10
3	15
4	
10	


Rule:

Fill in the table and find the rule.


1	3
2	5
3	7
4	
10	

Rule:

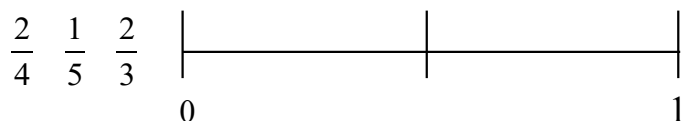
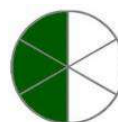
Find an equivalent fraction.



Find an equivalent fraction.



Place the fractions on the number line below.

Compare the fractions using $>$, $<$, or $=$.


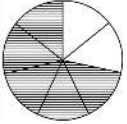

$\frac{3}{6} \underline{\hspace{1cm}} \frac{1}{3}$



Name:

Weekly Math Review - Q2:4

Date:

Wednesday	Thursday																				
How many times larger is 700 than 70?	Write this number in word form. 39,083																				
Find the Sum. $17,081 + 8,391$	Find the Difference. $17,081 - 8,391$																				
Find the Product. 285×71	Find the Product. 549×64																				
Find the Quotient. $4,768 \div 7$	Find the Quotient. $2,489 \div 4$																				
Melissa is having a party with 15 guests. If she spent a total of \$330 on food, how much did she spend on food for each person?	Ann purchased 8 packs of grape gum, 12 packs of cherry gum, and 6 packs of strawberry gum. If there are 6 pieces in each pack, how many pieces of gum did Ann purchase?																				
Find ALL the factors of 73. Prime or Composite?	Find the first 5 multiples of 16.																				
Fill in the table and find the rule. <table border="1" data-bbox="212 1339 370 1539"> <tr><td>1</td><td>4</td></tr> <tr><td>2</td><td>7</td></tr> <tr><td>3</td><td>10</td></tr> <tr><td>4</td><td></td></tr> <tr><td>10</td><td></td></tr> </table> Rule:	1	4	2	7	3	10	4		10		Fill in the table and find the rule. <table border="1" data-bbox="932 1339 1089 1539"> <tr><td>1</td><td>3</td></tr> <tr><td>2</td><td>6</td></tr> <tr><td>3</td><td>9</td></tr> <tr><td>4</td><td></td></tr> <tr><td>10</td><td></td></tr> </table> Rule:	1	3	2	6	3	9	4		10	
1	4																				
2	7																				
3	10																				
4																					
10																					
1	3																				
2	6																				
3	9																				
4																					
10																					
Use multiplication to find 2 equivalent fractions. $\frac{1}{4}$ $\frac{1}{6}$	Use multiplication to find 2 equivalent fractions. $\frac{2}{5}$ $\frac{3}{7}$																				
Compare the fractions using $>$, $<$, or $=$.  $\frac{3}{4}$ _____ $\frac{5}{7}$ 	Compare the fractions using $>$, $<$, or $=$. Draw the fractions.  $\frac{2}{4}$ _____ $\frac{4}{6}$ 